










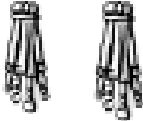
Evidence of Evolution

Background

When Charles Darwin first proposed the idea that all new species descend from an ancestor, he performed an exhaustive amount of research to provide as much evidence as possible. Today, the major pieces of evidence for this theory can be broken down into the fossil record, embryology, comparative anatomy, and molecular biology.

Fossils

This is a series of skulls and front leg fossils of organisms believed to be ancestors of the modern-day horse.

				
				
Equus (modern horse)	Pliohippus	Merychippus	Mesohippus	Eohippus (Dawn Horse)

Source: <http://www.iq.poquoson.org>

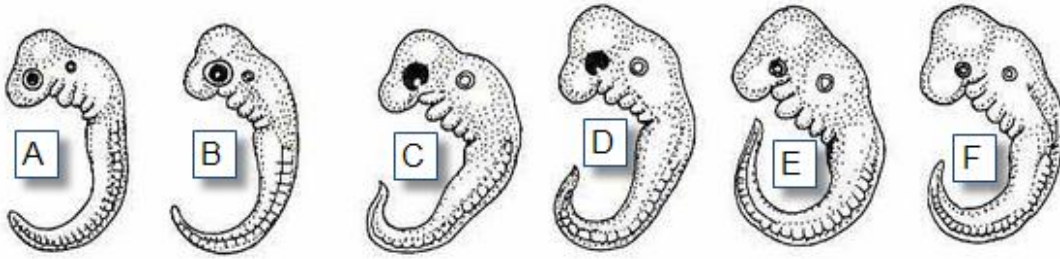
1. Give two similarities between each of the skulls that might lead to the conclusion that these are all related species.

2. What is the biggest change in skull anatomy that occurred from the dawn horse to the modern horse?

3. What is the biggest change in leg anatomy that occurred from the dawn horse to the modern horse?

Embryology

Organisms that are closely related may also have physical similarities before they are even born! Take a look at the six different embryos below:

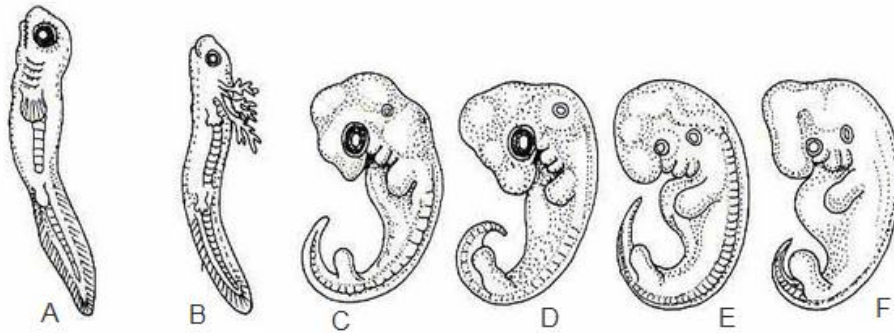


Source: <http://www.starlarvae.org>

Hypothesize which embryo is from each of the following organisms:

Species	Embryo
Human	
Chicken	
Rabbit	
Tortoise	
Salamander	
Fish	

These are older, more developed embryos from the same organisms.

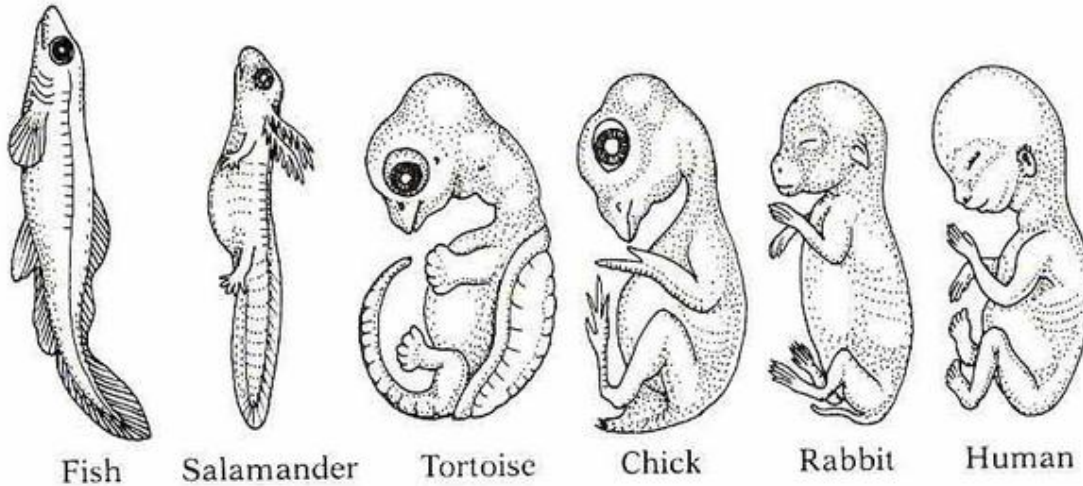


Hypothesize which embryo is from each of the following organisms:

Species	Embryo
Human	
Chicken	
Rabbit	
Tortoise	
Salamander	
Fish	

Name: _____ Class: _____ Date: _____

These are embryos at their most advanced stage, shortly before birth.



Describe how the embryos changed for each of these organisms from their earliest to latest stages.

Species	Anatomical Changes From Early to Late Stages
Human	
Chicken	
Rabbit	
Tortoise	
Salamander	
Fish	

1. Look again at the six embryos in their earliest stages. Describe the patterns you see. What physical similarities exist between each of the embryos?

2. Does this suggest an evolutionary relationship? Explain how these embryos can be used as evidence of a common ancestor between each of these six organisms.

Comparative Anatomy

Shown below are images of the skeletal structure of the front limbs of 6 animals: human, crocodile, whale, cat, bird, and bat. Each animal has a similar set of bones. Color code each of the bones according to this key:

Humerus []

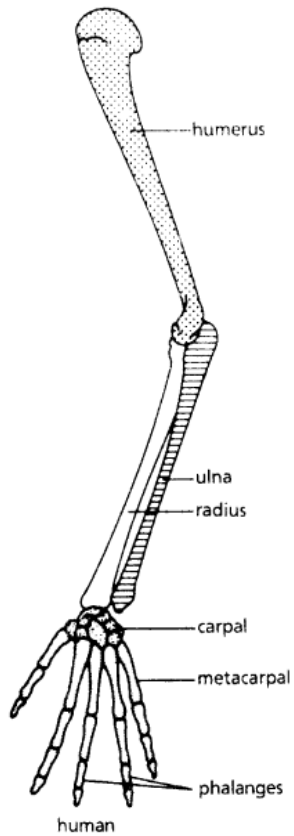
Carpals []

Ulna []

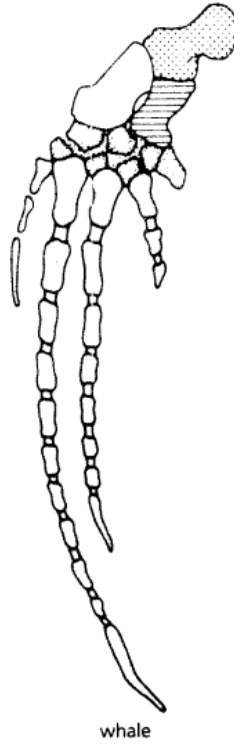
Metacarpals []

Radius []

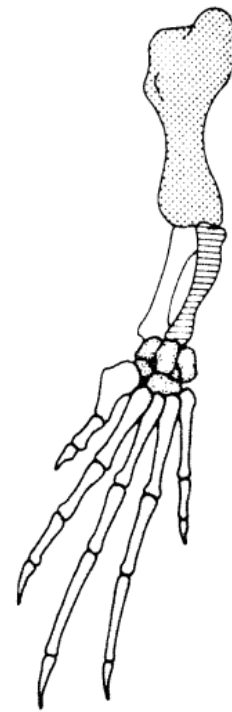
Phalanges []



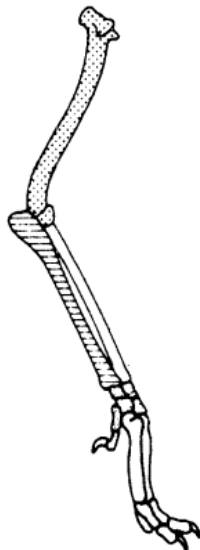
human



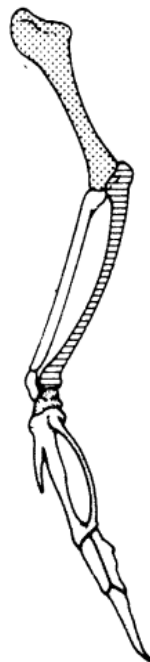
whale



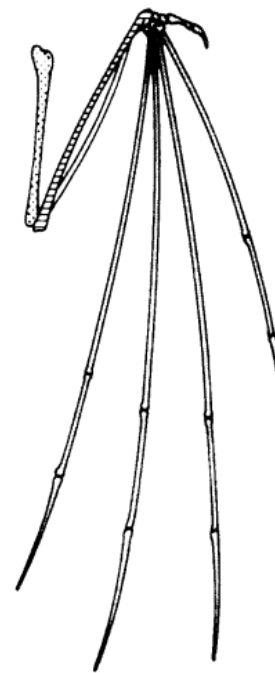
crocodile



cat



bird



bat

Name: _____ Class: _____ Date: _____

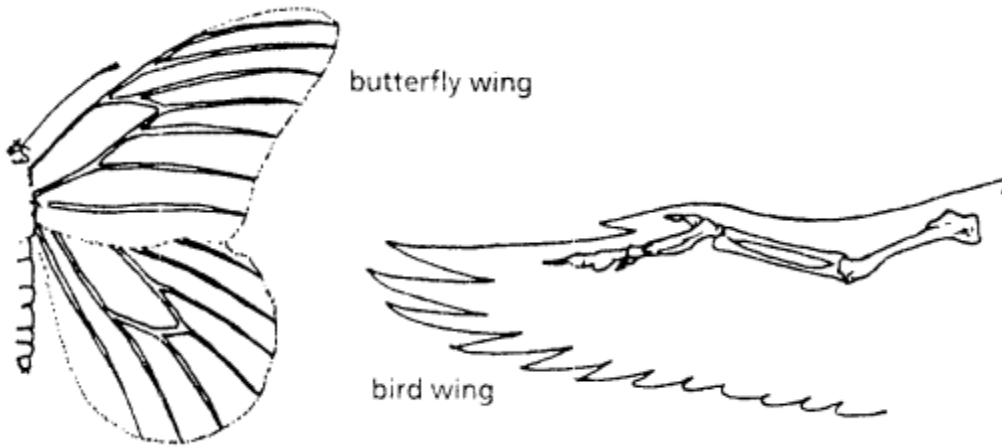
For each animal, indicate what type of movement each limb is responsible for.

Animal	Primary Functions
Human	Using tools, picking up and holding objects
Whale	
Cat	
Bat	
Bird	
Crocodile	

Compare the skeletal structure of each limb to the human arm. Relate the differences you see in *form* to the differences in *function*.

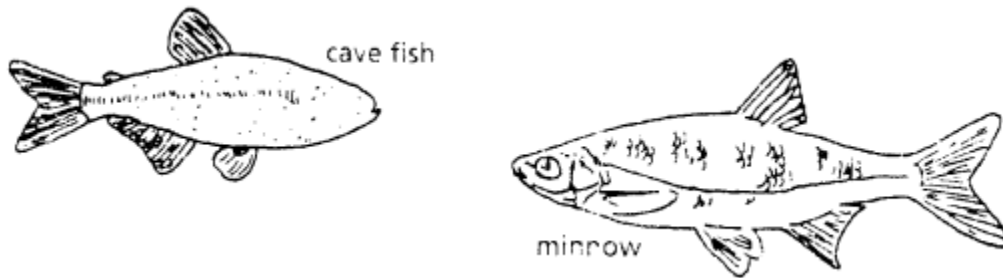
Animal	Comparison to Human Arm in Form	Comparison to Human Arm in Function
Whale	Whale has a much shorter and thicker humerus, radius, and ulna. Much longer metacarpals. Thumb has been shortened to a stub.	The whale fin needs to be longer to help in movement through water. Thumbs are not necessary as the fins are not used for grasping.
Cat		
Bat		
Bird		
Crocodile		

Compare the anatomy of the butterfly and bird wing below.



1. What is the function of each of these structures?
2. How are they different in form? Give specific differences.

Compare the overall body structure of the cave fish and the minnow below.



1. What is the biggest, most obvious difference between the body structure of these two fish?
2. Assume the two fish came from the same original ancestor. Why might the cave fish have evolved without eyesight?
3. What kind of sensory adaptation would you hypothesize the cave fish has to allow it to navigate in a cave, including catching and eating food?

Name: _____ Class: _____ Date: _____

You have now studied three different types of anatomical structures:

- **Homologous structures** show individual variations on a common anatomical theme. These are seen in organisms that are closely related.

1. Give an example of a homologous structure from this activity:

- **Analogous structures** have very different anatomies but similar functions. These are seen in organisms that are not necessarily closely related, but live in similar environments and have similar adaptations.

2. Give an example of an analogous structure from this activity:

- **Vestigial structures** are anatomical remnants that were important in the organism's ancestors, but are no longer used in the same way.

3. Give an example of a vestigial structure from this activity:

4. Below are some vestigial structures found in humans. For each, hypothesize what its function may have been.

Structure	Possible function?
Wisdom teeth	
Appendix	
Muscles for moving the ear	
Body hair	
Little toe	
Tailbone	

5. How are vestigial structures an example of evidence of evolution?

Molecular Biology

Cytochrome c is a protein found in mitochondria. It is used in the study of evolutionary relationships because most animals have this protein. Cytochrome c is made of 104 amino acids joined together.

Below is a list of the amino acids in part of a cytochrome protein molecule for 9 different animals. Any sequences exactly the same for all animals have been skipped.

For each non-human animal, take a highlighter and mark any amino acids that are different than the human sequence. When you finish, record how many differences you found in the table on the next page.

	42	43	44	46	47	49	50	53	54	55	56	57
Human	Q	A	P	Y	S	T	A	K	N	K	G	I
Chicken	Q	A	E	F	S	T	D	K	N	K	G	I
Horse	Q	A	P	F	S	T	D	K	N	K	G	I
Tuna	Q	A	E	F	S	T	D	K	S	K	G	I
Frog	Q	A	A	F	S	T	D	K	N	K	G	I
Shark	Q	A	Q	F	S	T	D	K	S	K	G	I
Turtle	Q	A	E	F	S	T	E	K	N	K	G	I
Monkey	Q	A	P	Y	S	T	A	K	N	K	G	I
Rabbit	Q	A	V	F	S	T	D	K	N	K	G	I

	58	60	61	62	63	64	65	66	100	101	102	103	104
Human	I	G	E	D	T	L	M	E	K	A	T	N	E
Chicken	T	G	E	D	T	L	M	E	D	A	T	S	K
Horse	T	K	E	E	T	L	M	E	K	A	T	N	E
Tuna	V	N	N	E	T	L	R	E	K	A	T	S	-
Frog	T	G	E	E	T	L	M	E	S	A	C	S	K
Shark	T	Q	Q	E	T	L	R	I	K	T	A	A	S
Turtle	T	G	E	E	T	L	M	E	D	A	T	S	K
Monkey	T	G	E	D	T	L	M	E	K	A	T	N	E
Rabbit	T	G	E	D	T	L	M	E	K	A	T	N	E

Animal	Number of Amino Acid Differences Compared to Human Cytochrome C	Animal	Number of Amino Acid Differences Compared to Human Cytochrome C
Horse		Shark	
Chicken		Turtle	
Tuna		Monkey	
Frog		Rabbit	

